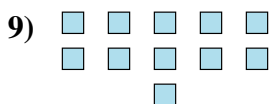
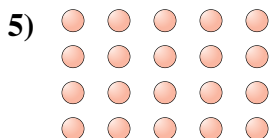



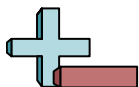


Determine if the number of shapes is even or odd.

Answers



- 1. _____
- 2. _____
- 3. _____
- 4. _____
- 5. _____
- 6. _____
- 7. _____
- 8. _____
- 9. _____
- 10. _____




Determine if the number of shapes is even or odd.



7



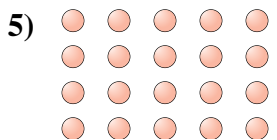
18



6



7



20



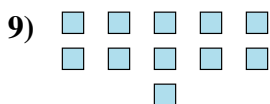
9



11



5



11



6

Answers

1. odd

2. even

3. even

4. odd

5. even

6. odd

7. odd

8. odd

9. odd

10. even